




Solve each problem.


Answers

1) Luke spent \$11.78 on candy at the mall. He gave the cashier a twenty dollar bill. How much change should he get back?



- 1. _____
- 2. _____
- 3. _____

2) Rachel spent \$5.92 on a movie ticket. She gave the cashier a ten dollar bill. How much change should she get back?



3) Edward spent \$15.23 buying some new toys. He bought them using a twenty dollar bill. How much change should he get back?






Solve each problem.

1) Luke spent \$11.78 on candy at the mall. He gave the cashier a twenty dollar bill. How much change should he get back?



2) Rachel spent \$5.92 on a movie ticket. She gave the cashier a ten dollar bill. How much change should she get back?



3) Edward spent \$15.23 buying some new toys. He bought them using a twenty dollar bill. How much change should he get back?



Answers

1. **C**

2. **B**

3. **C**